

### Quiz 4c

Name:

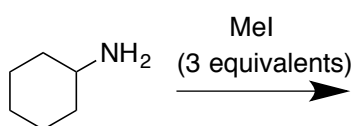
Signature:

Recitation Instructor:

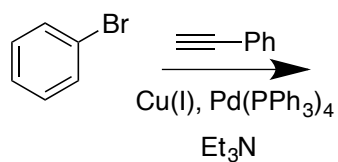
Start 5 minutes in, 30 minutes total... as always Good luck!.

1. Predict the products of the following reactions (4 points each)

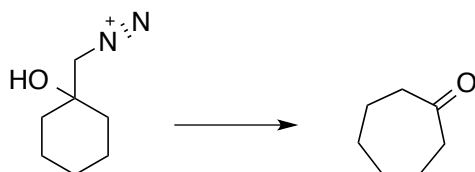
A.



B.



2. Show a mechanism for the following transformation (6 points).



3. Show a synthesis for the following (6 points)

